


# Reef Fish



**Instructions:** Walk around the Unseen New World until you find the large **Reef Fish** exhibit.

**Look at that pretty fish!**

**Pick a fish and write down three words to describe it.**

1. \_\_\_\_\_
2. \_\_\_\_\_
3. \_\_\_\_\_

## How big is that fish?

In the United States we usually measure things in inches. This is called the customary system of measurement.

Scientists use the metric system to make measurements. They use millimeters, centimeters and meters to measure things.

**1 inch equals 2.5 centimeters.**




**Look at the exhibit sign below the tank and find the picture of the fish you like. Write down the name of the fish and how big it gets.**

**Fish name:** \_\_\_\_\_

**Fish size:** \_\_\_\_\_ inches


**Can you figure out how big the fish is using the metric system of measurement?**

\_\_\_\_\_ Inches X 2.5 = \_\_\_\_\_ centimeters.



## Answer Key:

# Reef Fish



**Instructions:** Walk around the Unseen New World until you find the large **Reef Fish** exhibit.

**Look at that pretty fish!**

Pick a fish and write down three words to describe it.


1. There are several words to choose from: **Colorful, Bright, Scaly, Trim, Shimmering, Vivid, Slimy, Fanciful, Shiny, Vibrant, Slender, Round, Striped, Spotted, Lively, Rough, Smooth, Slow, Quick, Dramatic, Brilliant, Stunning, Crystal, etc.**

### How big is that fish?

In the United States we usually measure things in inches. This is called the customary system of measurement.

Scientists use the metric system to make measurements. They use millimeters, centimeters and meters to measure things.

**1 inch equals 2.5 centimeters.**



**Find the picture of the fish you like on the sign below the exhibit. Write down the name of the fish and how big it gets.**

**Fish name:** There are several fish to choose from: **Blueheaded Wrasse, Blue Chromis, Blue Hamlet, Blue Tang, Cocoa Damsel, French Angelfish, Park Fish, Queen Angelfish, Royal Gramma, Spotted Parrot Fish, Yellowheaded Wrasse, Yellowtail Reef Fish,**

**Fish size:** This depends on the fish chosen.

**Can you figure out how big the fish is using the metric system of measurement?**

\_\_\_\_\_ Inches X 2.5 = \_\_\_\_\_ centimeters.

